



Cambridge International Examinations
Cambridge International General Certificate of Secondary Education

CANDIDATE
NAME


--

CENTRE
NUMBER

--	--	--	--	--

CANDIDATE
NUMBER

--	--	--	--



CO-ORDINATED SCIENCES

0654/23

Paper 2 (Core)

October/November 2014

2 hours

Candidates answer on the Question Paper.

No Additional Materials are required.

READ THESE INSTRUCTIONS FIRST

Write your Centre number, candidate number and name on all the work you hand in.

Write in dark blue or black pen.

You may use an HB soft pencil for any diagrams, graphs, tables or rough working.

Do not use staples, paper clips, glue or correction fluid.

DO NOT WRITE IN ANY BARCODES.

Answer **all** questions.

Electronic calculators may be used.

You may lose marks if you do not show your working or if you do not use appropriate units.

A copy of the Periodic Table is printed on page 32.

At the end of the examination, fasten all your work securely together.

The number of marks is given in brackets [] at the end of each question or part question.

This document consists of **31** printed pages and **1** blank page.

- 1 Fig. 1.1 shows what happens when a small piece of potassium metal reacts with chlorine gas inside a container.

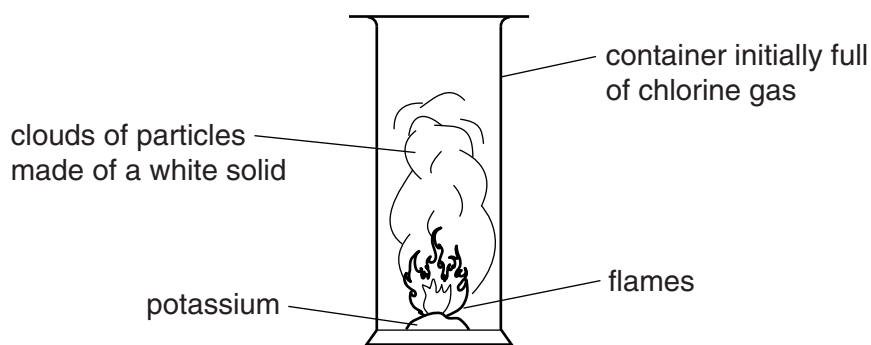


Fig. 1.1

When the reaction has finished, particles of a white solid compound are left in the container.

- (a) (i) Suggest the name of the white solid compound.

.....[1]

- (ii) Fig. 1.2 shows diagrams of a potassium atom and a chlorine atom.

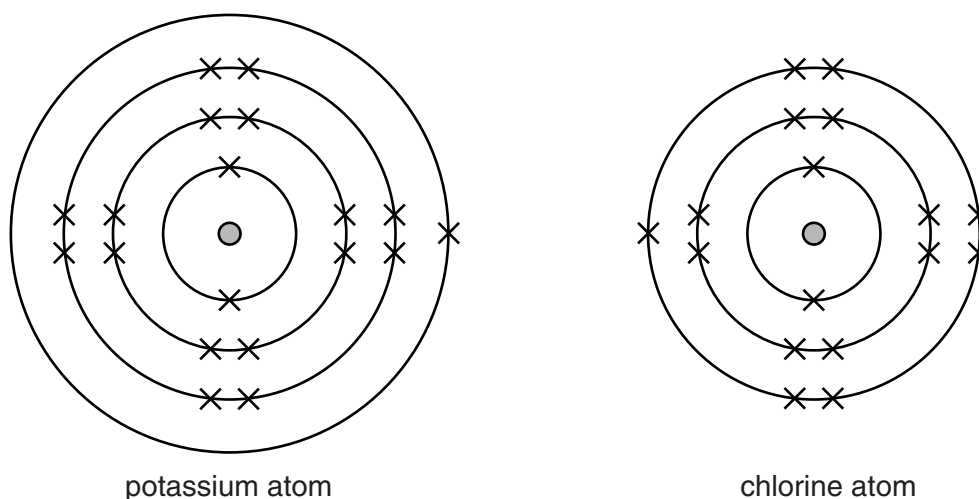


Fig. 1.2

Describe what happens to these atoms when they change into ions.

.....

[2]

- (b) A chemical change occurs when an electrical current passes through a solution of the compound copper chloride.

Fig. 1.3 shows apparatus that can be used to investigate this chemical change.

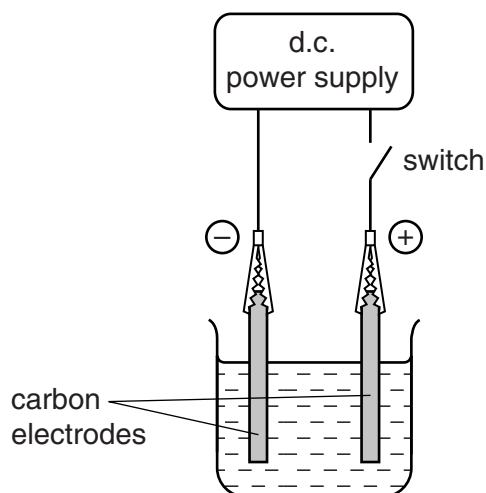


Fig. 1.3

- (i) Name the process which occurs in the apparatus shown in Fig. 1.3 when the switch is closed.[1]
- (ii) On Fig. 1.3 use label lines to label the cathode and the electrolyte. [2]
- (iii) When the switch is closed, bubbles of chlorine appear on the surface of the anode.

Describe a safe chemical test for chlorine.

.....
[2]

- (c) A student investigates whether there is any change in the mass of the electrodes during the process shown in Fig. 1.3.

She uses the apparatus shown in Fig. 1.3 and her results are shown in Table 1.1.

Table 1.1

electrode	mass before the switch is closed /g	mass after the switch has been closed for some time /g
anode	48.3	48.3
cathode	47.6	47.9

- (i) State the changes in mass of the electrodes during the experiment.

.....
.....[1]

- (ii) Explain the results obtained for the cathode.

.....
.....[1]

2 Fig. 2.1 shows the chromosomes from the nucleus of a single cell of a human male.




Fig. 2.1

(a) (i) State the number of chromosomes that can be seen in Fig. 2.1.

.....[1]

(ii) On Fig. 2.1, draw a circle around the Y chromosome.

[1]

(b) Chromosomes carry genes. Define a *gene*.

.....

[2]

(c) Complete the genetic diagram below to explain why, in a human population, equal numbers of male and female babies should be expected.

parents

phenotypes

female

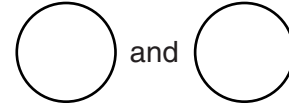
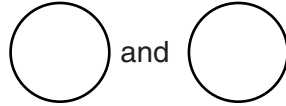
male

sex chromosomes

XX

XY

gametes



chromosomes and phenotypes of offspring

		male gametes	
female gametes			

ratio of male to female

[4]

(d) In sea turtles, the sexes of the offspring are not determined by chromosomes. Instead, sex depends on the temperature at which the eggs are incubated. Fig. 2.2 shows this effect.

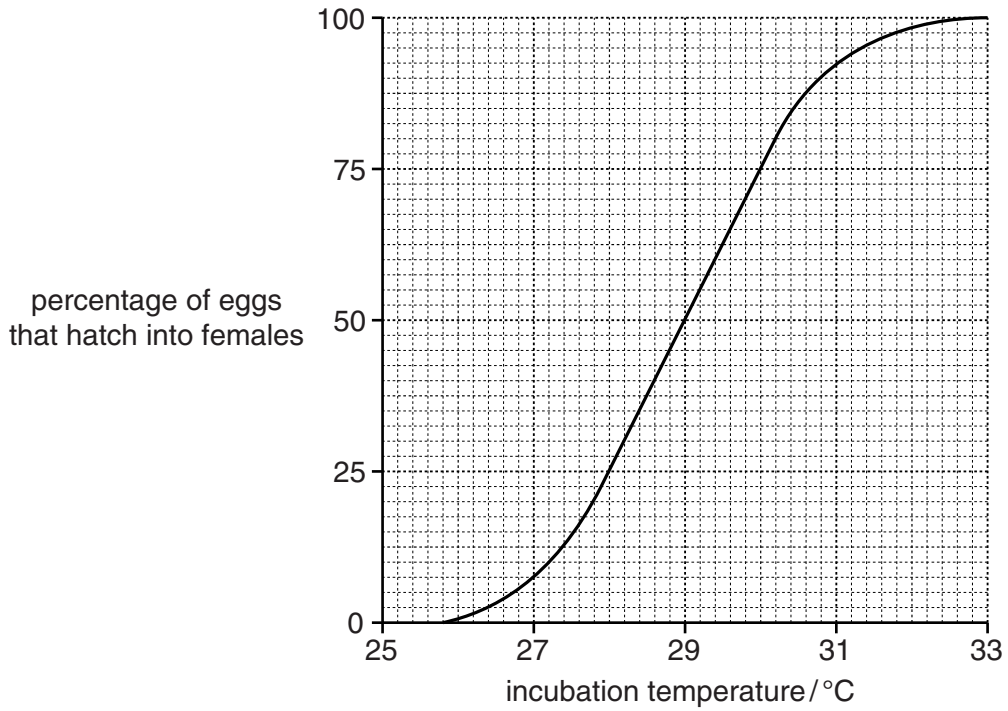


Fig. 2.2

(i) Describe the effect of temperature on the percentage of eggs that hatch into females.

.....
[1]

(ii) State the temperature at which equal numbers of male and female offspring are produced.

.....°C [1]

(iii) Use the information in Fig. 2.2 to predict how global warming will affect the sea turtle population. Explain your answer.

.....

[2]

- 3 (a) A motorcycle is driven along a straight road. Fig. 3.1 shows a speed/time graph for the motion of the motorcycle from the time the rider sees a car approaching and gradually slows down.

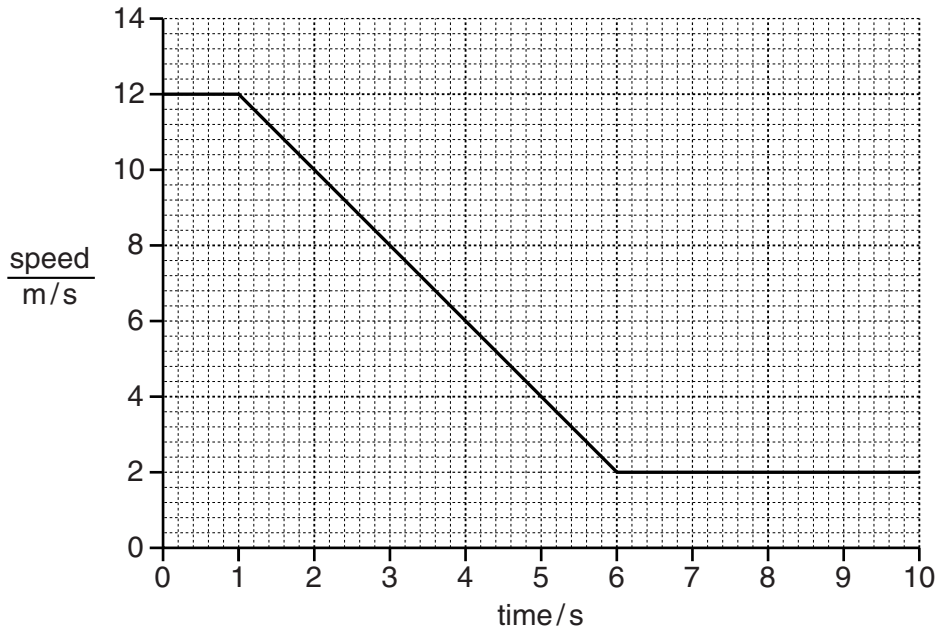


Fig. 3.1

- (i) State the speed at which the driver was travelling before he slowed down.
 m/s [1]

- (ii) State whether the motorcycle stopped during the period of ten seconds shown in Fig. 3.1.
 Explain your answer.

 [1]

- (b) The motorcycle rider notices that the sound from a car's engine becomes louder as the car approaches and drops in pitch as the car passes.
 Describe these changes in terms of the frequency and amplitude of sound waves released.
 becomes louder

 has a lower pitch
 [2]

(c) The motorcycle has one headlamp, connected to a 12V battery.

The headlamp takes a current of 4 A.

Calculate the resistance of the headlamp.

State the formula that you use, show your working and state the unit of your answer.

formula

working

resistance = unit [3]

(d) As the motorcycle drives along, the temperature of the air in the tyres increases.

By referring to the motion of molecules in air, explain why this results in an increased tyre pressure.

.....
.....
.....
.....[3]

- (e) The metal bodywork of the motorcycle can be painted using electrostatic paint spraying. In electrostatic paint spraying, the surface being painted is given a negative electric charge.

The paint particles emerge from the paint sprayer carrying a positive charge.

Fig. 3.2 shows part of a motorcycle frame being painted.

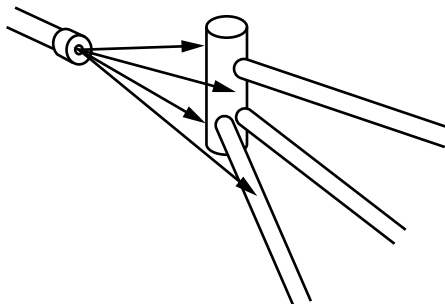


Fig. 3.2

- (i) Suggest why more paint sticks to the charged frame than to an uncharged frame.

.....
.....[1]

- (ii) The motorcycle is painted evenly. An even coat of paint is achieved because the paint particles repel each other.

Explain why the particles repel each other.

.....
.....[1]

Please turn over for Question 4.

4 (a) Define the term *transpiration*.

.....

[2]

(b) Fig. 4.1 shows xylem vessels from the stem of a plant as seen in longitudinal section.

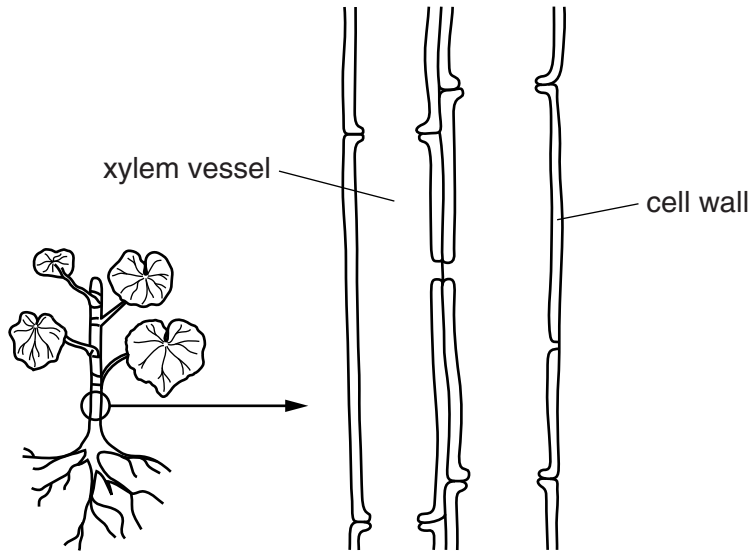


Fig. 4.1

(i) On Fig. 4.1 draw an arrow to show the direction in which water flows through the xylem vessel. [1]

(ii) Name **one** other substance, apart from water, that is transported through xylem vessels.

.....[1]

(c) Fig. 4.2 shows a stem and a root in transverse section.

On the stem, the positions of the xylem and the phloem tissues have been labelled.

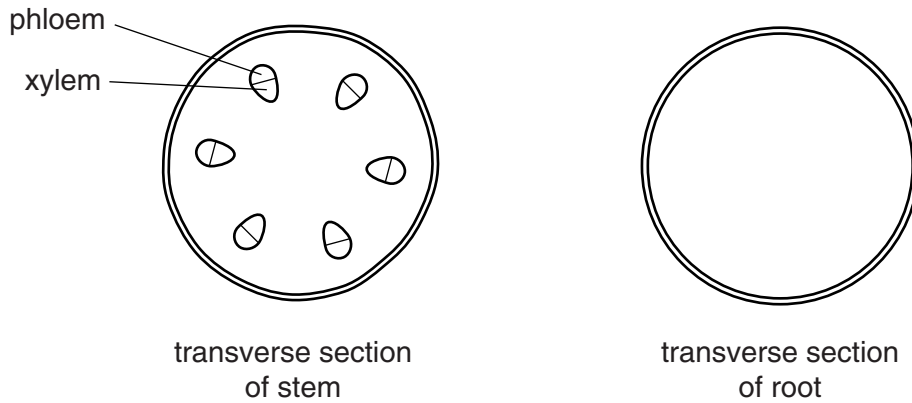


Fig. 4.2

(i) Complete the diagram of the root by drawing in the positions of the xylem and the phloem tissues and labelling them. [3]

(ii) State the function of the phloem.

.....[1]

(d) Plants absorb water from the soil. Name the plant cells that take up most of this water.

..... [1]

- 5 A student investigates the reactions between dilute hydrochloric acid and five substances.

Fig. 5.1 shows the five substances contained in test-tubes **A** to **E**.

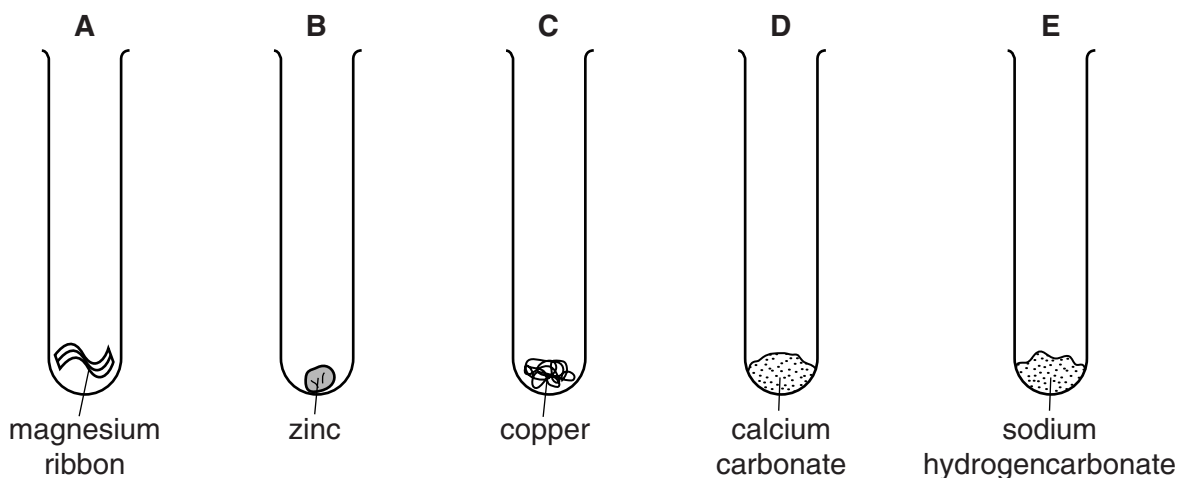


Fig. 5.1

She adds dilute hydrochloric acid to each tube.

Her observations and temperature measurements are shown in Table 5.1.

Table 5.1

test-tube	observations	temperature of the reactants before reaction/ $^{\circ}\text{C}$	temperature of the mixture in the test-tube after a short time/ $^{\circ}\text{C}$
A	gas given off quickly	18	45
B	gas given off slowly	18	19
C	no gas produced	18	
D	gas given off quickly	18	20
E	gas given off quickly	18	11

- (a) (i) Name the gas given off when dilute hydrochloric acid is added to test-tubes **A** and **B**.

.....[1]

- (ii) Describe a test and its result for the gas you have named in (a)(i).

test

result[1]

(iii) The pH of the dilute hydrochloric acid before reacting is 2.

Predict the pH of the solution in test-tube **D** after reaction.

Explain your answer.

prediction

explanation

.....

.....[2]

(b) When substances are mixed together, a change in temperature is evidence that a chemical reaction occurs.

(i) Suggest the temperature of the mixture in test-tube **C** after a short time.

Write your answer in Table 5.1. [1]

(ii) Explain your answer to (b)(i).

.....

.....[1]

(iii) State and explain in which test-tube, **A**, **B**, **C**, **D** or **E**, an endothermic reaction occurs.

test-tube

explanation

.....[1]

(c) Suggest **two** possible reasons why gas is given off more quickly in test-tube **A** than in **B**.

1

.....

2

.....[2]

- 6 (a) Infra-red waves can pass through optical fibres.

Fig. 6.1 shows a length of optical fibre.

An infra-red ray goes in at one end and emerges at the other end.




Fig. 6.1

On Fig. 6.1, use a ruler to draw its path along the optical fibre. [2]

- (b) (i) State what is transferred by all electromagnetic waves.

.....[1]

- (ii) γ -radiation is also part of the spectrum of electromagnetic waves.

State **one** difference between γ -radiation and infra-red radiation.

.....

.....[1]

- (c) Fig. 6.2 shows an experiment to investigate infra-red radiation.

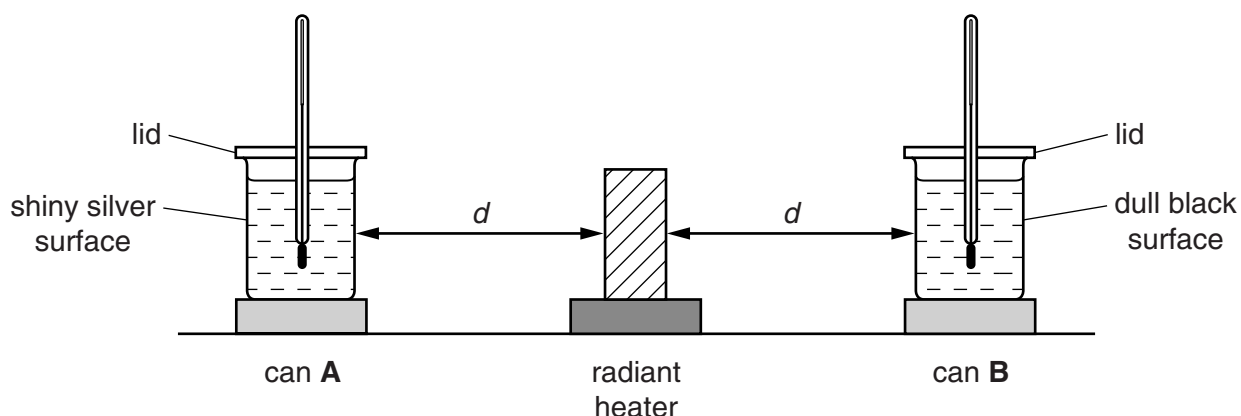


Fig. 6.2

Two similar cans **A** and **B** contain equal amounts of water which start off at the same temperature.

Can **A** has a shiny silver surface and can **B** has a dull black surface.

A thermometer is placed into each can. The cans stand on cork mats and are placed at the same distance d from a radiant heater emitting infra-red radiation.

The temperature of the water is measured every minute for twelve minutes.

Fig. 6.3 shows how the temperature of the water changes for the two cans.

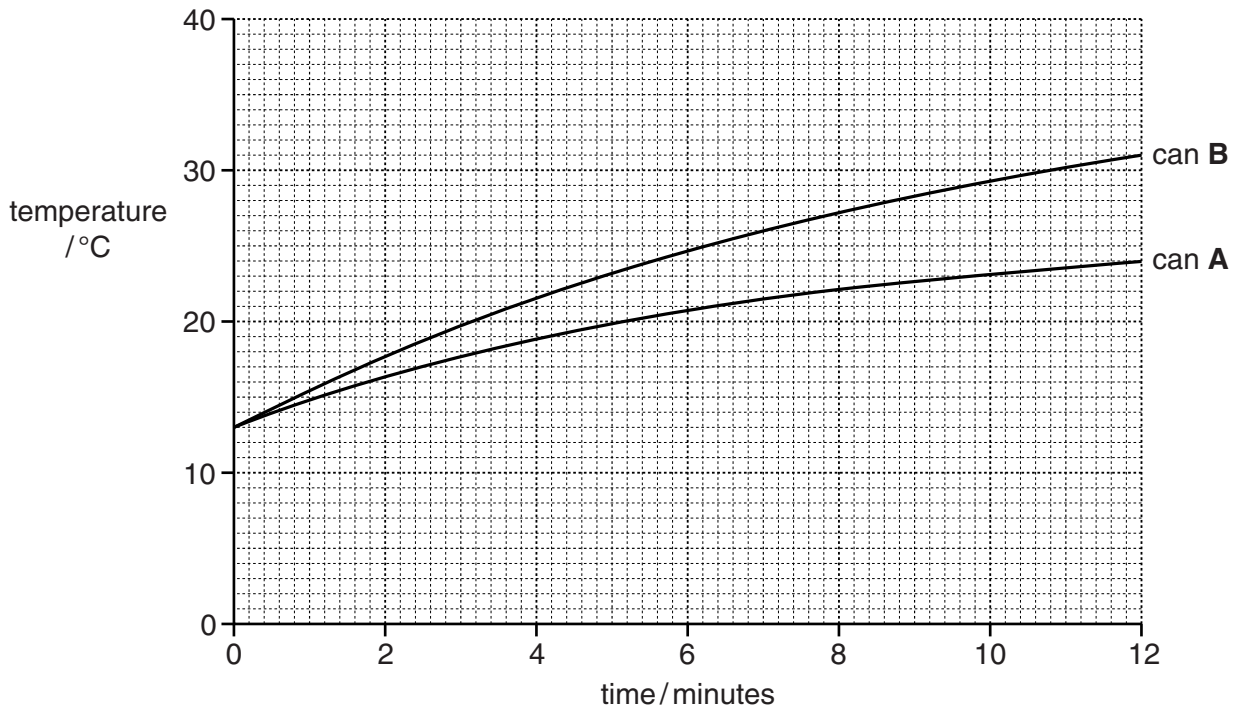


Fig. 6.3

(i) State the starting temperature of the water in both cans.

.....°C [1]

(ii) Explain why the two cans are placed on cork mats.

.....[1]

(iii) Describe how the temperature changes are different for the two cans.

.....

[1]

(iv) Suggest reasons for your answer to (c)(iii).

.....

[2]

7 Fig. 7.1 shows the concentration of carbon dioxide in a muscle cell of an athlete before, during and after a period of exercise.

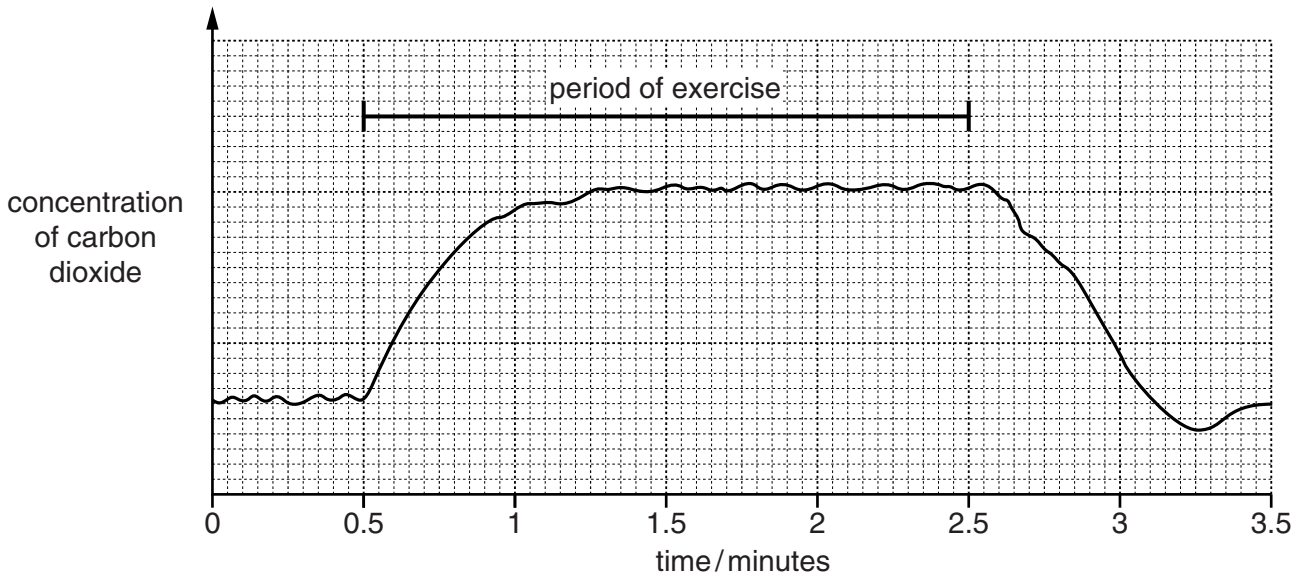
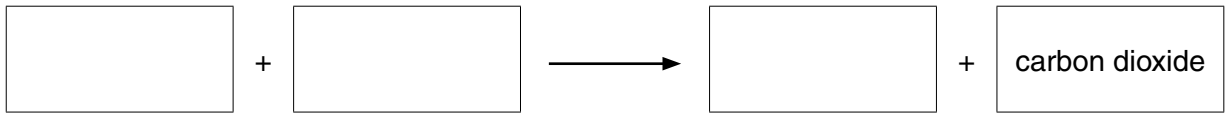


Fig. 7.1

(a) (i) Name the process that produces carbon dioxide in cells.

.....[1]

(ii) Complete the word equation for this process.



[2]

(b) State the time in Fig. 7.1 at which the carbon dioxide concentration is lowest.

.....min [1]

(c) During exercise, the blood flow to the muscles increases. Explain why this increased blood flow is important during exercise.

.....

.....

.....

.....[2]

(d) Training increases the number of red blood cells in an athlete's body. Suggest how this affects the amount of lactic acid produced when an athlete is sprinting. Explain your answer.

.....
.....
.....[2]

- 8 (a) A spillage of a radioactive substance occurs in a store for radioactive materials.

The activity due to normal background radiation is 100 counts per minute.

After the spillage, the activity in the store rises to 900 counts per minute.

- (i) State the meaning of the term *background radiation*.

.....
[1]

- (ii) Write down the increase in activity produced by the spilled material.

..... counts per minute [1]

- (iii) The pie chart in Fig. 8.1 shows the proportion of the average background radiation that comes from all sources in the United Kingdom.

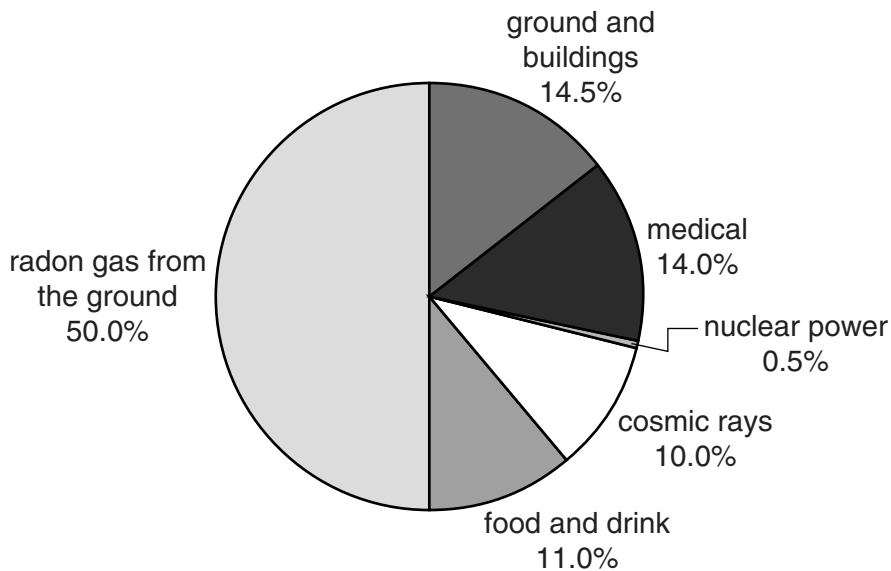


Fig. 8.1

Use the pie chart to explain why doubling the amount of power generated from nuclear sources would only produce a relatively small increase in background radiation.

.....
[1]

- (b) Apart from cost, give **one** advantage and **one** disadvantage of an oil-fired power station compared to a nuclear power station.

advantage

.....

disadvantage

.....[2]

(c) Electricity supplied to a house is used to produce light.

The lighting circuits in a house are constructed so that the lamps are connected in a parallel circuit and not a series circuit.

(i) Draw simple circuit diagrams to show the difference between a series circuit and a parallel circuit.

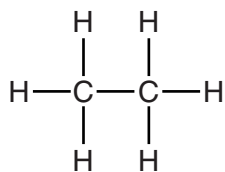
Each circuit should include a power source (a cell).

[2]

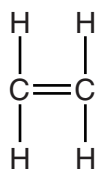
(ii) State **two** advantages of connecting lamps in parallel in a lighting circuit.

- 1
-
- 2
-[2]

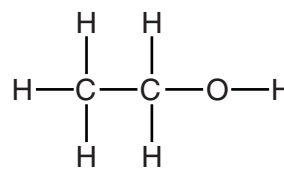
9 Fig. 9.1 shows molecules of ethane, ethene and ethanol.



ethane



ethene



ethanol

Fig. 9.1

(a) (i) State and explain which of these compounds are hydrocarbons.

compounds

explanation

.....[2]

(ii) State and explain which **one** of the three compounds named above is an unsaturated compound.

compounds

explanation

.....[1]

(b) (i) State **one** use of ethanol.

.....[1]

(ii) In industry, ethanol is made in a chemical reaction involving ethene.

Name the substance that reacts with ethene to produce ethanol.

.....[1]

(iii) The reaction in (b)(ii) needs a catalyst.

State the meaning of the term *catalyst*.

.....

.....

.....[2]

(c) Ethene is a colourless gas that reacts to form poly(ethene) which is a white solid.

(i) Describe what happens when ethene molecules react to form poly(ethene) molecules.

Draw a diagram to help you answer this question.

Use the symbol $\text{---} \bigcirc \text{E} \text{---}$ to show an ethene molecule.

.....
.....[2]

(ii) State the full name of the type of chemical reaction that occurs in (c)(i).

.....[2]

10 (a) Fig. 10.1 represents some waves on water.

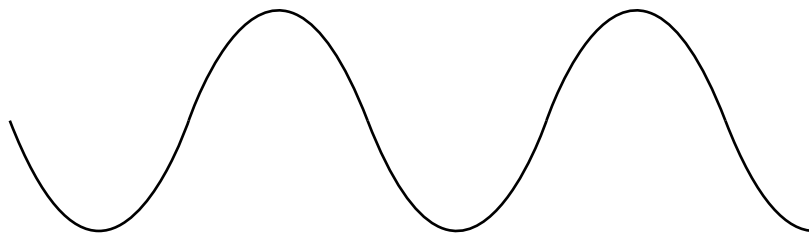


Fig. 10.1

(i) On Fig. 10.1 label with an arrow (\longleftrightarrow) one wavelength.

[1]

(ii) The waves have a frequency of 0.2 Hz.

Explain what is meant by a *frequency of 0.2 Hz*.

.....
.....[1]

(iii) Water waves are transverse waves and sound waves are longitudinal waves.

Describe how a transverse wave is different from a longitudinal wave.

You may draw a labelled diagram if it helps your answer.

.....
.....
.....[2]

(b) A large meteorite falls into the sea.

(i) The meteorite produces a wave which travels at a speed of 5.6 m/s.

Calculate the time taken by the wave to travel 33 600 m.

State the formula that you use and show your working.

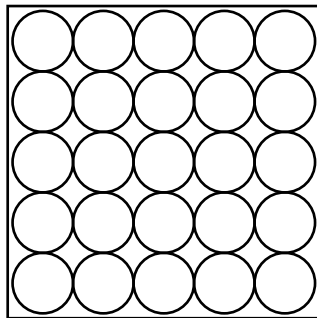
formula

working


time = s [2]

(ii) The meteorite is a solid and the sea water is a liquid.

Complete Fig. 10.2 to show the arrangement of particles in a liquid. The diagram for a solid has been done for you.



solid



liquid

[2]

Fig. 10.2

(iii) The mass of the meteorite is 32 000 kg and its volume is 4 m³.

Calculate the density of the meteorite in kg/m³.

State the formula that you use and show your working.

formula

working

density = kg/m³ [2]

11 Fig. 11.1 shows two liver cells, as seen under a light microscope.

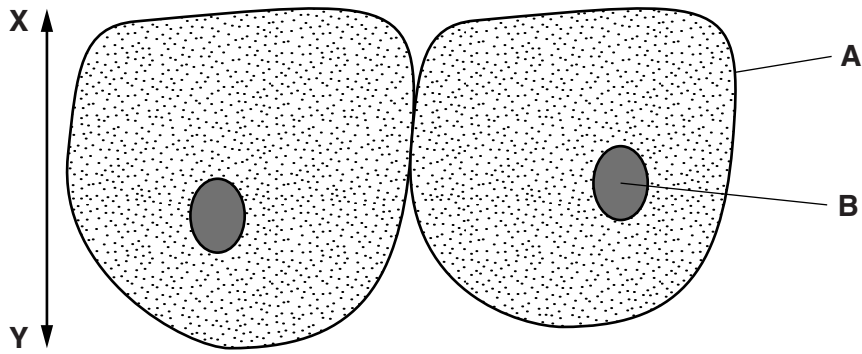


Fig. 11.1

(a) Name the structures labelled **A** and **B**.

A

B

[2]

(b) State **two** functions of liver cells.

1

2 [2]

(c) Give **three** ways in which a plant palisade cell differs from a liver cell.

1

2

3 [3]

(d) In Fig. 11.1, the actual height of the cells along the line **X–Y** is 0.03mm. Calculate the magnification of the drawing.

magnification = [2]

(e) Name **two** of the blood vessels that are associated with the liver, and outline their function.

vessel 1

function

vessel 2

function

[2]

12 (a) The Periodic Table lists the elements in order of their proton numbers.

Fig. 12.1 shows the positions of the first eighteen elements.

The letters are **not** the chemical symbols of the elements.

I	II	III	IV	V	VI	VII	0
						L	M
N						O	P

Fig. 12.1

(i) State the meaning of the terms *proton number* and *nucleon number (mass number)*.

proton number

.....

nucleon number

.....[2]

(ii) Predict and explain whether element **N** has a higher or lower melting point than element **P**.

.....

.....[1]

(iii) State and explain which other element in Fig. 12.1 has chemical properties that are very similar to those of element **O**.

element

explanation

.....[2]

- (b) Carbon dioxide is a gas at room temperature and contains molecules that have the chemical formula CO_2 .

State the type of chemical bonding that joins the atoms together in a molecule of carbon dioxide.

Give a reason for your choice.

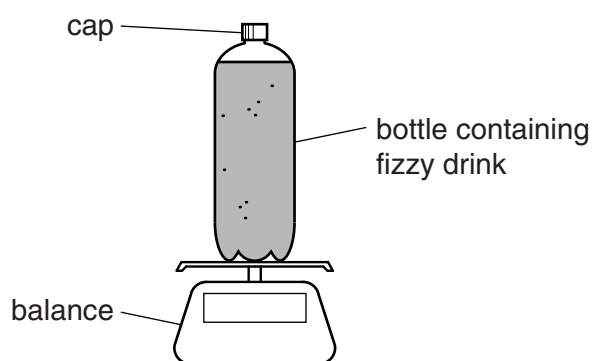
type of bonding

reason

.....[2]

- (c) A student investigates how much carbon dioxide gas is contained in a carbonated (fizzy) drink.

He measures the mass of a full bottle of fizzy drink.



He shakes the bottle. He releases the carbon dioxide by carefully unscrewing the cap.

He measures the mass of the bottle and cap, and liquid without the carbon dioxide.

His results are shown in Table 12.1.

Table 12.1

mass of bottle filled with fizzy drink /g	mass of bottle and cap, and liquid without carbon dioxide /g	volume of the liquid /cm ³
526.2	524.0	500.0

- (i) State the mass of carbon dioxide that was released from the fizzy drink.

Show your working.

mass =g [1]

- (ii) Calculate the mass of carbon dioxide that is dissolved in 1.0 dm³ of the fizzy drink.

Show your working.

mass =g [2]

DATA SHEET
The Periodic Table of the Elements

		Group																																																																																																																																																																																																																																																				
I	II											III	IV	V	VI	VII	O																																																																																																																																																																																																																																					
7 Li Lithium 3	9 Be Beryllium 4	<table style="width: 100%; border-collapse: collapse;"> <tr> <td style="width: 5%;">1 H Hydrogen 1</td> <td colspan="10"></td> <td colspan="2"></td> <td colspan="2"></td> <td colspan="2"></td> <td colspan="2"></td> </tr> <tr> <td>11 Na Sodium 11</td> <td>12 Mg Magnesium 12</td> <td>13 Al Aluminium 13</td> <td>14 Si Silicon 14</td> <td>15 P Phosphorus 15</td> <td>16 S Sulfur 16</td> <td>17 Cl Chlorine 17</td> <td>18 Ar Argon 18</td> <td>19 F Fluorine 9</td> <td>20 Ne Neon 10</td> <td>21 Sc Scandium 21</td> <td>22 Ti Titanium 22</td> <td>23 V Vanadium 23</td> <td>24 Cr Chromium 24</td> <td>25 Mn Manganese 25</td> <td>26 Fe Iron 26</td> <td>27 Co Cobalt 27</td> <td>28 Ni Nickel 28</td> <td>29 Cu Copper 29</td> <td>30 Zn Zinc 30</td> <td>31 Ga Gallium 31</td> <td>32 Ge Germanium 32</td> <td>33 As Arsenic 33</td> <td>34 Se Selenium 34</td> <td>35 Br Bromine 35</td> <td>36 Kr Krypton 36</td> <td>37 Rb Rubidium 37</td> <td>38 Sr Strontium 38</td> <td>39 Y Yttrium 39</td> <td>40 Zr Zirconium 40</td> <td>41 Nb Niobium 41</td> <td>42 Mo Molybdenum 42</td> <td>43 Tc Technetium 43</td> <td>44 Ru Ruthenium 44</td> <td>45 Rh Rhodium 45</td> <td>46 Pd Palladium 46</td> <td>47 Ag Silver 47</td> <td>48 Cd Cadmium 48</td> <td>49 In Indium 49</td> <td>50 Sn Tin 50</td> <td>51 Sb Antimony 51</td> <td>52 Te Tellurium 52</td> <td>53 I Iodine 53</td> <td>54 Xe Xenon 54</td> <td>55 Cs Caesium 55</td> <td>56 Ba Barium 56</td> <td>57 La Lanthanum 57</td> <td>58 Ce Cerium 58</td> <td>59 Pr Praseodymium 59</td> <td>60 Nd Neodymium 60</td> <td>61 Pm Promethium 61</td> <td>62 Sm Samarium 62</td> <td>63 Eu Europium 63</td> <td>64 Gd Gadolinium 64</td> <td>65 Tb Terbium 65</td> <td>66 Dy Dysprosium 66</td> <td>67 Ho Holmium 67</td> <td>68 Er Erbium 68</td> <td>69 Tm Thulium 69</td> <td>70 Yb Ytterbium 70</td> <td>71 Lu Lutetium 71</td> <td>72 Hf Hafnium 72</td> <td>73 Ta Tantalum 73</td> <td>74 W Tungsten 74</td> <td>75 Re Rhenium 75</td> <td>76 Os Osmium 76</td> <td>77 Ir Iridium 77</td> <td>78 Pt Platinum 78</td> <td>79 Au Gold 79</td> <td>80 Hg Mercury 80</td> <td>81 Tl Thallium 81</td> <td>82 Pb Lead 82</td> <td>83 Bi Bismuth 83</td> <td>84 Po Polonium 84</td> <td>85 At Astatine 85</td> <td>86 Rn Radon 86</td> <td>87 Fr Francium 87</td> <td>88 Ra Radium 88</td> <td>89 Ac Actinium 89</td> <td>90 Th Thorium 90</td> <td>91 Pa Protactinium 91</td> <td>92 U Uranium 92</td> <td>93 Np Neptunium 93</td> <td>94 Pu Plutonium 94</td> <td>95 Am Americium 95</td> <td>96 Cm Curium 96</td> <td>97 Bk Berkelium 97</td> <td>98 Cf Californium 98</td> <td>99 Es Einsteinium 99</td> <td>100 Fm Fermium 100</td> <td>101 Md Mendelevium 101</td> <td>102 No Nobelium 102</td> <td>103 Lr Lawrencium 103</td> <td>104 Rf Rutherfordium 104</td> <td>105 Db Dubnium 105</td> <td>106 Sg Seaborgium 106</td> <td>107 Bh Bohrium 107</td> <td>108 Hs Hassium 108</td> <td>109 Mt Meitnerium 109</td> <td>110 Ds Darmstadtium 110</td> <td>111 Rg Roentgenium 111</td> <td>112 Cn Copernicium 112</td> <td>113 Nh Nihonium 113</td> <td>114 Fl Flerovium 114</td> <td>115 Mc Moscovium 115</td> <td>116 Lv Livermorium 116</td> <td>117 Ts Tennessine 117</td> <td>118 Og Oganesson 118</td> </tr> </table>										1 H Hydrogen 1																			11 Na Sodium 11	12 Mg Magnesium 12	13 Al Aluminium 13	14 Si Silicon 14	15 P Phosphorus 15	16 S Sulfur 16	17 Cl Chlorine 17	18 Ar Argon 18	19 F Fluorine 9	20 Ne Neon 10	21 Sc Scandium 21	22 Ti Titanium 22	23 V Vanadium 23	24 Cr Chromium 24	25 Mn Manganese 25	26 Fe Iron 26	27 Co Cobalt 27	28 Ni Nickel 28	29 Cu Copper 29	30 Zn Zinc 30	31 Ga Gallium 31	32 Ge Germanium 32	33 As Arsenic 33	34 Se Selenium 34	35 Br Bromine 35	36 Kr Krypton 36	37 Rb Rubidium 37	38 Sr Strontium 38	39 Y Yttrium 39	40 Zr Zirconium 40	41 Nb Niobium 41	42 Mo Molybdenum 42	43 Tc Technetium 43	44 Ru Ruthenium 44	45 Rh Rhodium 45	46 Pd Palladium 46	47 Ag Silver 47	48 Cd Cadmium 48	49 In Indium 49	50 Sn Tin 50	51 Sb Antimony 51	52 Te Tellurium 52	53 I Iodine 53	54 Xe Xenon 54	55 Cs Caesium 55	56 Ba Barium 56	57 La Lanthanum 57	58 Ce Cerium 58	59 Pr Praseodymium 59	60 Nd Neodymium 60	61 Pm Promethium 61	62 Sm Samarium 62	63 Eu Europium 63	64 Gd Gadolinium 64	65 Tb Terbium 65	66 Dy Dysprosium 66	67 Ho Holmium 67	68 Er Erbium 68	69 Tm Thulium 69	70 Yb Ytterbium 70	71 Lu Lutetium 71	72 Hf Hafnium 72	73 Ta Tantalum 73	74 W Tungsten 74	75 Re Rhenium 75	76 Os Osmium 76	77 Ir Iridium 77	78 Pt Platinum 78	79 Au Gold 79	80 Hg Mercury 80	81 Tl Thallium 81	82 Pb Lead 82	83 Bi Bismuth 83	84 Po Polonium 84	85 At Astatine 85	86 Rn Radon 86	87 Fr Francium 87	88 Ra Radium 88	89 Ac Actinium 89	90 Th Thorium 90	91 Pa Protactinium 91	92 U Uranium 92	93 Np Neptunium 93	94 Pu Plutonium 94	95 Am Americium 95	96 Cm Curium 96	97 Bk Berkelium 97	98 Cf Californium 98	99 Es Einsteinium 99	100 Fm Fermium 100	101 Md Mendelevium 101	102 No Nobelium 102	103 Lr Lawrencium 103	104 Rf Rutherfordium 104	105 Db Dubnium 105	106 Sg Seaborgium 106	107 Bh Bohrium 107	108 Hs Hassium 108	109 Mt Meitnerium 109	110 Ds Darmstadtium 110	111 Rg Roentgenium 111	112 Cn Copernicium 112	113 Nh Nihonium 113	114 Fl Flerovium 114	115 Mc Moscovium 115	116 Lv Livermorium 116	117 Ts Tennessine 117	118 Og Oganesson 118	11 B Boron 5	12 C Carbon 6	13 Al Aluminium 13	14 N Nitrogen 7	15 P Phosphorus 15	16 S Sulfur 16	17 Cl Chlorine 17	18 Ar Argon 18	19 F Fluorine 9	20 Ne Neon 10	21 Sc Scandium 21	22 Ti Titanium 22	23 V Vanadium 23	24 Cr Chromium 24	25 Mn Manganese 25	26 Fe Iron 26	27 Co Cobalt 27	28 Ni Nickel 28	29 Cu Copper 29	30 Zn Zinc 30	31 Ga Gallium 31	32 Ge Germanium 32	33 As Arsenic 33	34 Se Selenium 34	35 Br Bromine 35	36 Kr Krypton 36	37 Rb Rubidium 37	38 Sr Strontium 38	39 Y Yttrium 39	40 Zr Zirconium 40	41 Nb Niobium 41	42 Mo Molybdenum 42	43 Tc Technetium 43	44 Ru Ruthenium 44	45 Rh Rhodium 45	46 Pd Palladium 46	47 Ag Silver 47	48 Cd Cadmium 48	49 In Indium 49	50 Sn Tin 50	51 Sb Antimony 51	52 Te Tellurium 52	53 I Iodine 53	54 Xe Xenon 54	55 Cs Caesium 55	56 Ba Barium 56	57 La Lanthanum 57	58 Ce Cerium 58	59 Pr Praseodymium 59	60 Nd Neodymium 60	61 Pm Promethium 61	62 Sm Samarium 62	63 Eu Europium 63	64 Gd Gadolinium 64	65 Tb Terbium 65	66 Dy Dysprosium 66	67 Ho Holmium 67	68 Er Erbium 68	69 Tm Thulium 69	70 Yb Ytterbium 70	71 Lu Lutetium 71	72 Hf Hafnium 72	73 Ta Tantalum 73	74 W Tungsten 74	75 Re Rhenium 75	76 Os Osmium 76	77 Ir Iridium 77	78 Pt Platinum 78	79 Au Gold 79	80 Hg Mercury 80	81 Tl Thallium 81	82 Pb Lead 82	83 Bi Bismuth 83	84 Po Polonium 84	85 At Astatine 85	86 Rn Radon 86	87 Fr Francium 87	88 Ra Radium 88	89 Ac Actinium 89	90 Th Thorium 90	91 Pa Protactinium 91	92 U Uranium 92	93 Np Neptunium 93	94 Pu Plutonium 94	95 Am Americium 95	96 Cm Curium 96	97 Bk Berkelium 97	98 Cf Californium 98	99 Es Einsteinium 99	100 Fm Fermium 100	101 Md Mendelevium 101	102 No Nobelium 102	103 Lr Lawrencium 103	104 Rf Rutherfordium 104	105 Db Dubnium 105	106 Sg Seaborgium 106	107 Bh Bohrium 107	108 Hs Hassium 108	109 Mt Meitnerium 109	110 Ds Darmstadtium 110	111 Rg Roentgenium 111	112 Cn Copernicium 112	113 Nh Nihonium 113	114 Fl Flerovium 114	115 Mc Moscovium 115	116 Lv Livermorium 116	117 Ts Tennessine 117	118 Og Oganesson 118
1 H Hydrogen 1																																																																																																																																																																																																																																																						
11 Na Sodium 11	12 Mg Magnesium 12	13 Al Aluminium 13	14 Si Silicon 14	15 P Phosphorus 15	16 S Sulfur 16	17 Cl Chlorine 17	18 Ar Argon 18	19 F Fluorine 9	20 Ne Neon 10	21 Sc Scandium 21	22 Ti Titanium 22	23 V Vanadium 23	24 Cr Chromium 24	25 Mn Manganese 25	26 Fe Iron 26	27 Co Cobalt 27	28 Ni Nickel 28	29 Cu Copper 29	30 Zn Zinc 30	31 Ga Gallium 31	32 Ge Germanium 32	33 As Arsenic 33	34 Se Selenium 34	35 Br Bromine 35	36 Kr Krypton 36	37 Rb Rubidium 37	38 Sr Strontium 38	39 Y Yttrium 39	40 Zr Zirconium 40	41 Nb Niobium 41	42 Mo Molybdenum 42	43 Tc Technetium 43	44 Ru Ruthenium 44	45 Rh Rhodium 45	46 Pd Palladium 46	47 Ag Silver 47	48 Cd Cadmium 48	49 In Indium 49	50 Sn Tin 50	51 Sb Antimony 51	52 Te Tellurium 52	53 I Iodine 53	54 Xe Xenon 54	55 Cs Caesium 55	56 Ba Barium 56	57 La Lanthanum 57	58 Ce Cerium 58	59 Pr Praseodymium 59	60 Nd Neodymium 60	61 Pm Promethium 61	62 Sm Samarium 62	63 Eu Europium 63	64 Gd Gadolinium 64	65 Tb Terbium 65	66 Dy Dysprosium 66	67 Ho Holmium 67	68 Er Erbium 68	69 Tm Thulium 69	70 Yb Ytterbium 70	71 Lu Lutetium 71	72 Hf Hafnium 72	73 Ta Tantalum 73	74 W Tungsten 74	75 Re Rhenium 75	76 Os Osmium 76	77 Ir Iridium 77	78 Pt Platinum 78	79 Au Gold 79	80 Hg Mercury 80	81 Tl Thallium 81	82 Pb Lead 82	83 Bi Bismuth 83	84 Po Polonium 84	85 At Astatine 85	86 Rn Radon 86	87 Fr Francium 87	88 Ra Radium 88	89 Ac Actinium 89	90 Th Thorium 90	91 Pa Protactinium 91	92 U Uranium 92	93 Np Neptunium 93	94 Pu Plutonium 94	95 Am Americium 95	96 Cm Curium 96	97 Bk Berkelium 97	98 Cf Californium 98	99 Es Einsteinium 99	100 Fm Fermium 100	101 Md Mendelevium 101	102 No Nobelium 102	103 Lr Lawrencium 103	104 Rf Rutherfordium 104	105 Db Dubnium 105	106 Sg Seaborgium 106	107 Bh Bohrium 107	108 Hs Hassium 108	109 Mt Meitnerium 109	110 Ds Darmstadtium 110	111 Rg Roentgenium 111	112 Cn Copernicium 112	113 Nh Nihonium 113	114 Fl Flerovium 114	115 Mc Moscovium 115	116 Lv Livermorium 116	117 Ts Tennessine 117	118 Og Oganesson 118																																																																																																																																											

* 58–71 Lanthanoid series
† 90–103 Actinoid series

Key

a	X
= relative atomic mass	
= atomic symbol	
= atomic (proton) number	

The volume of one mole of any gas is 24 dm³ at room temperature and pressure (r.t.p.).

Permission to reproduce items where third-party owned material protected by copyright is included has been sought and cleared where possible. Every reasonable effort has been made by the publisher (UCLES) to trace copyright holders, but if any items requiring clearance have unwittingly been included, the publisher will be pleased to make amends at the earliest possible opportunity.

Cambridge International Examinations is part of the Cambridge Assessment Group. Cambridge Assessment is the brand name of University of Cambridge Local Examinations Syndicate (UCLES), which is itself a department of the University of Cambridge.